

Write your name here

Surname

Other names

Pearson
Edexcel GCSE

Centre Number

| | | | | | |
|--|--|--|--|--|--|
| | | | | | |
|--|--|--|--|--|--|

Candidate Number

| | | | | | |
|--|--|--|--|--|--|
| | | | | | |
|--|--|--|--|--|--|

Geography A

Unit 3: The Human Environment

Higher Tier

Monday 12 June 2017 – Afternoon
Time: 1 hour 15 minutes

Paper Reference
5GA3H/01

You must have:
Resource Booklet (enclosed)

Total Marks

Instructions

- Use **black** ink or ball-point pen.
- **Fill in the boxes** at the top of this page with your name, centre number and candidate number.
- In Section **A** answer **all** questions.
- In Section **B** answer **either** question 4 **or** 5.
- Answer the questions in the spaces provided
– *there may be more space than you need.*

Information

- The total mark for this paper is 69.
- The marks for **each** question are shown in brackets
– *use this as a guide as to how much time to spend on each question.*
- Questions labelled with an **asterisk** (*) are ones where the quality of your written communication will be assessed
– *you should take particular care on these questions with your spelling, punctuation and grammar, as well as the clarity of expression.*
- The marks available for spelling, punctuation and grammar are clearly indicated.

Advice

- Read each question carefully before you start to answer it.
- Check your answers if you have time at the end.

Turn over ►

P48696A

©2017 Pearson Education Ltd.

1/1/1/1



Pearson

SECTION A – THE HUMAN WORLD

Answer all questions in this section.

Topic 1 – Economic Change

1 (a) Define the term **tertiary sector**.

(1)

.....

.....

(b) Study Figure 1a in the Resource Booklet.

Describe the relationship between GDP per capita and the percentage of people employed in the secondary sector.

(2)

.....

.....

.....

(c) For either a named low income country (LIC) or a named middle income country (MIC), explain **two** reasons why the secondary sector has grown in recent years.

(4)

Named LIC or MIC

1

.....

.....

.....

2

.....

.....

.....

DO NOT WRITE IN THIS AREA

DO NOT WRITE IN THIS AREA

DO NOT WRITE IN THIS AREA



(d) Study Figure 1b in the Resource Booklet.

Suggest **one** reason for the location of the quarry shown in Figure 1b.

(2)

.....

.....

.....

.....

DO NOT WRITE IN THIS AREA

DO NOT WRITE IN THIS AREA

DO NOT WRITE IN THIS AREA



*(e) Explain why there has been a rapid growth in the UK's tertiary sector since 1970.

(6)

DO NOT WRITE IN THIS AREA

DO NOT WRITE IN THIS AREA

DO NOT WRITE IN THIS AREA

(Total for Question 1 = 15 marks)



Topic 2 – Settlement Change

- 2 (a) Study Figure 2a in the Resource Booklet.

Describe **one** difference between the population growth of São Paulo and Rio de Janeiro.

Use data in your answer.

(2)

.....

.....

.....

.....

- (b) Define the term **deindustrialisation**.

(1)

.....

.....

- (c) For a named UK settlement, describe **one** way its function has changed over time.

(2)

Named UK settlement

.....

.....

.....

.....

DO NOT WRITE IN THIS AREA

DO NOT WRITE IN THIS AREA

DO NOT WRITE IN THIS AREA



(d) Explain **two** changes to remote rural communities that have been caused by depopulation.

(4)

1

.....

.....

.....

.....

2

.....

.....

.....

DO NOT WRITE IN THIS AREA

DO NOT WRITE IN THIS AREA

DO NOT WRITE IN THIS AREA



DO NOT WRITE IN THIS AREA

DO NOT WRITE IN THIS AREA

DO NOT WRITE IN THIS AREA

*(e) Study Figure 2b (photograph) in the Resource Booklet.

Explain the advantages and disadvantages of developing sites such as the one shown in Figure 2b.

(6)

Area with horizontal dotted lines for writing the answer.

(Total for Question 2 = 15 marks)



Topic 3 – Population Change

3 (a) Define the term **ageing population**.

(1)

.....

.....

(b) Study Figure 3a in the Resource Booklet.

Compare the population density of New South Wales with the population density of Northern Territory.

(2)

.....

.....

.....

(c) Describe **one** limitation of the demographic transition model.

(2)

.....

.....

.....

DO NOT WRITE IN THIS AREA

DO NOT WRITE IN THIS AREA

DO NOT WRITE IN THIS AREA



DO NOT WRITE IN THIS AREA

DO NOT WRITE IN THIS AREA

DO NOT WRITE IN THIS AREA

(d) Study Figure 3b in the Resource Booklet.

Suggest **two** reasons for the differences in the shape of these population pyramids.

(4)

1.....

.....

.....

.....

2.....

.....

.....

.....



* (e) Explain the human and physical factors that have affected China's population distribution.

(6)

Area with horizontal dotted lines for writing the answer.

(Total for Question 3 = 15 marks)

TOTAL FOR SECTION A = 45 MARKS

DO NOT WRITE IN THIS AREA

DO NOT WRITE IN THIS AREA

DO NOT WRITE IN THIS AREA



DO NOT WRITE IN THIS AREA

DO NOT WRITE IN THIS AREA

DO NOT WRITE IN THIS AREA

BLANK PAGE
SECTION B BEGINS ON THE FOLLOWING PAGE.



SECTION B – PEOPLE ISSUES

Answer EITHER Question 4 OR Question 5.

Topic 4 – A Moving World

Spelling, punctuation and grammar will be assessed in 4*(e).

If you answer Question 4 put a cross in the box .

4 (a) Study Figure 4a in the Resource Booklet.

Compare the trends in UK immigration and emigration shown in Figure 4a.

Use data in your answer.

(4)

.....

.....

.....

.....

.....

.....

.....

.....

.....

.....

(b) Explain **two** transport developments that have increased rates of population movement.

(4)

1.....

.....

.....

.....

2.....

.....

.....

.....

DO NOT WRITE IN THIS AREA

DO NOT WRITE IN THIS AREA

DO NOT WRITE IN THIS AREA



DO NOT WRITE IN THIS AREA

DO NOT WRITE IN THIS AREA

DO NOT WRITE IN THIS AREA

BLANK PAGE

QUESTION 5 BEGINS ON THE FOLLOWING PAGE.



P 4 8 6 9 6 A 0 1 5 2 0

Topic 5 – A Tourist’s World

Spelling, punctuation and grammar will be assessed in 5*(e).

If you answer Question 5 put a cross in the box .

5 (a) Study Figure 5a in the Resource Booklet.

Compare the trends in outbound and inbound tourism shown on Figure 5a.

Use data in your answer.

(4)

.....

.....

.....

.....

.....

.....

.....

.....

.....

.....

(b) Explain **two** economic factors that have caused a growth in tourism.

(4)

1

.....

.....

.....

.....

.....

.....

.....

.....

.....

2

.....

.....

.....

.....

DO NOT WRITE IN THIS AREA

DO NOT WRITE IN THIS AREA

DO NOT WRITE IN THIS AREA



DO NOT WRITE IN THIS AREA

DO NOT WRITE IN THIS AREA

DO NOT WRITE IN THIS AREA

(c) Outline **one** way that a named EU resort changed during the involvement stage of the Butler model of resort development.

(2)

Named EU resort

.....

.....

.....

.....

(d) Study Figure 5b in the Resource Booklet.

Explain **two** reasons why some groups of people living in tourist destinations have negative attitudes towards tourism.

(4)

1

.....

.....

.....

2

.....

.....

.....



DO NOT WRITE IN THIS AREA

DO NOT WRITE IN THIS AREA

DO NOT WRITE IN THIS AREA

BLANK PAGE



DO NOT WRITE IN THIS AREA

DO NOT WRITE IN THIS AREA

DO NOT WRITE IN THIS AREA

BLANK PAGE



Pearson Edexcel GCSE

Geography A

Unit 3: The Human Environment

Monday 12 June 2017 – Afternoon

Resource Booklet

Paper Reference

5GA3F/01

5GA3H/01

Do not return this Resource Booklet with the question paper.

Information

- This Resource Booklet contains tables, photographs, maps, diagrams and graphs needed for use with the Unit 3: The Human Environment examination.

P48695A

©2017 Pearson Education Ltd.

1/1/1/1/1



Turn over ►



Pearson

| Country | Gross Domestic Product (GDP) per capita (US\$ per person per year) | % of people employed in each economic sector | | |
|------------|---|--|-----------|----------|
| | | Primary | Secondary | Tertiary |
| France | 40 500 | 1.7 | 19.4 | 78.9 |
| Luxembourg | 97 600 | 0.3 | 11.7 | 88.0 |
| Senegal | 2 400 | 17.2 | 24.0 | 58.8 |
| Uruguay | 21 100 | 7.4 | 20.4 | 72.2 |

Figure 1a

Economic and employment data for selected countries in 2014



Figure 1b

A limestone and gravel quarry in North Yorkshire, England

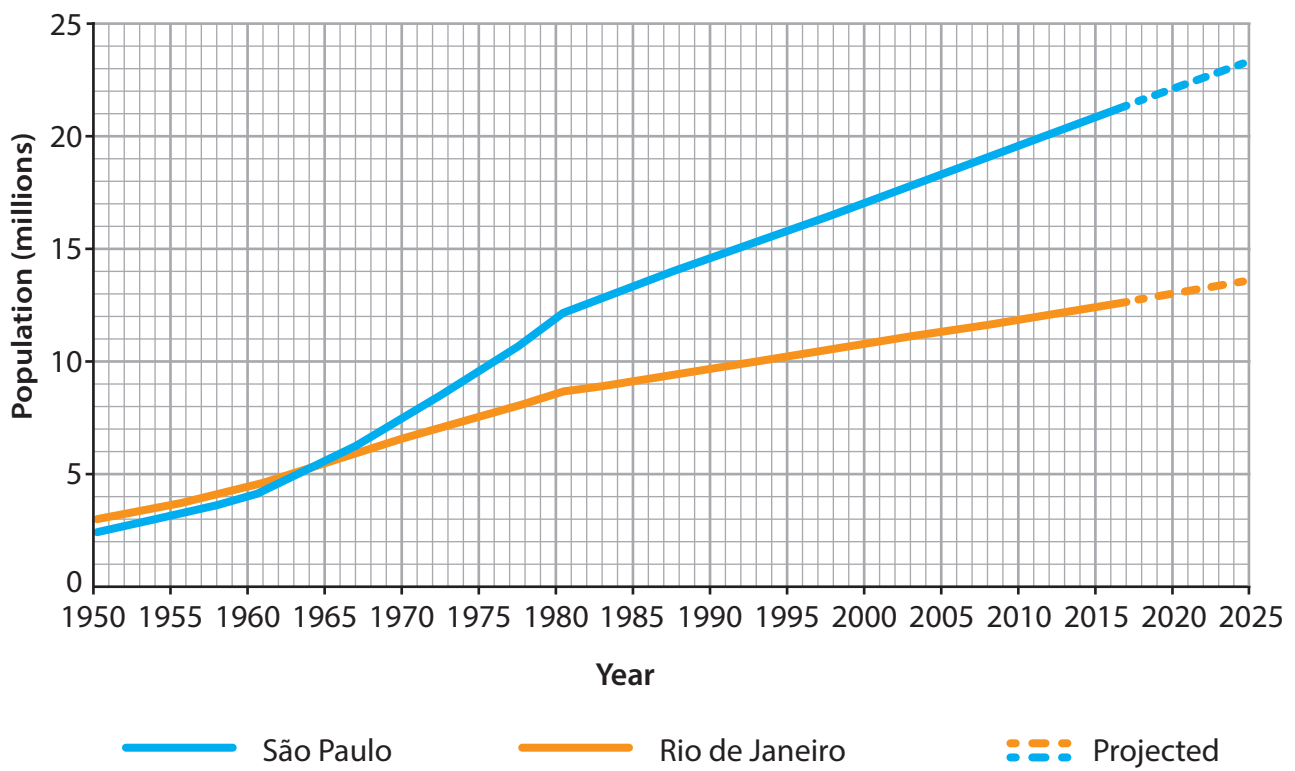


Figure 2a
Population growth in two urban areas in Brazil



Figure 2b

Development of part of the high street in Morecambe, England

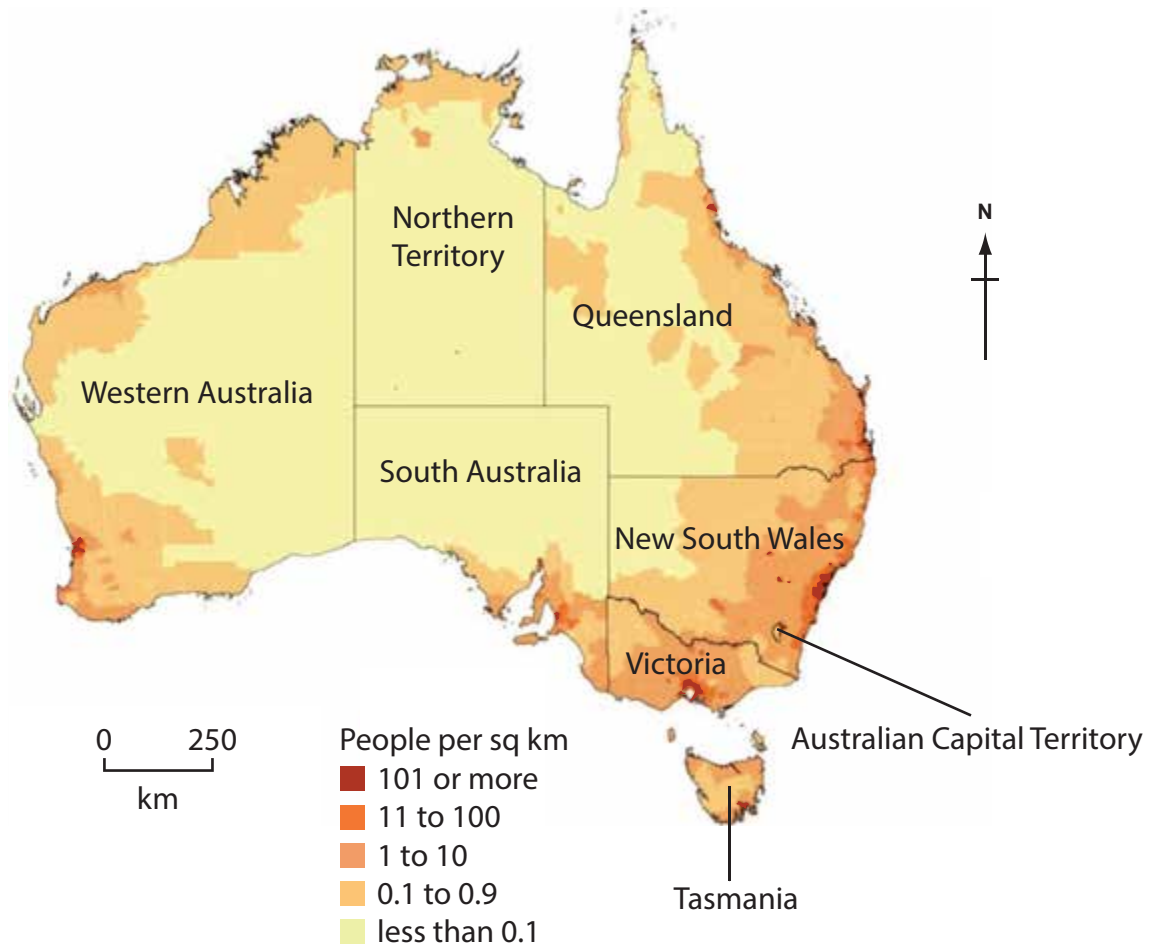


Figure 3a
Population density in Australia, 2014

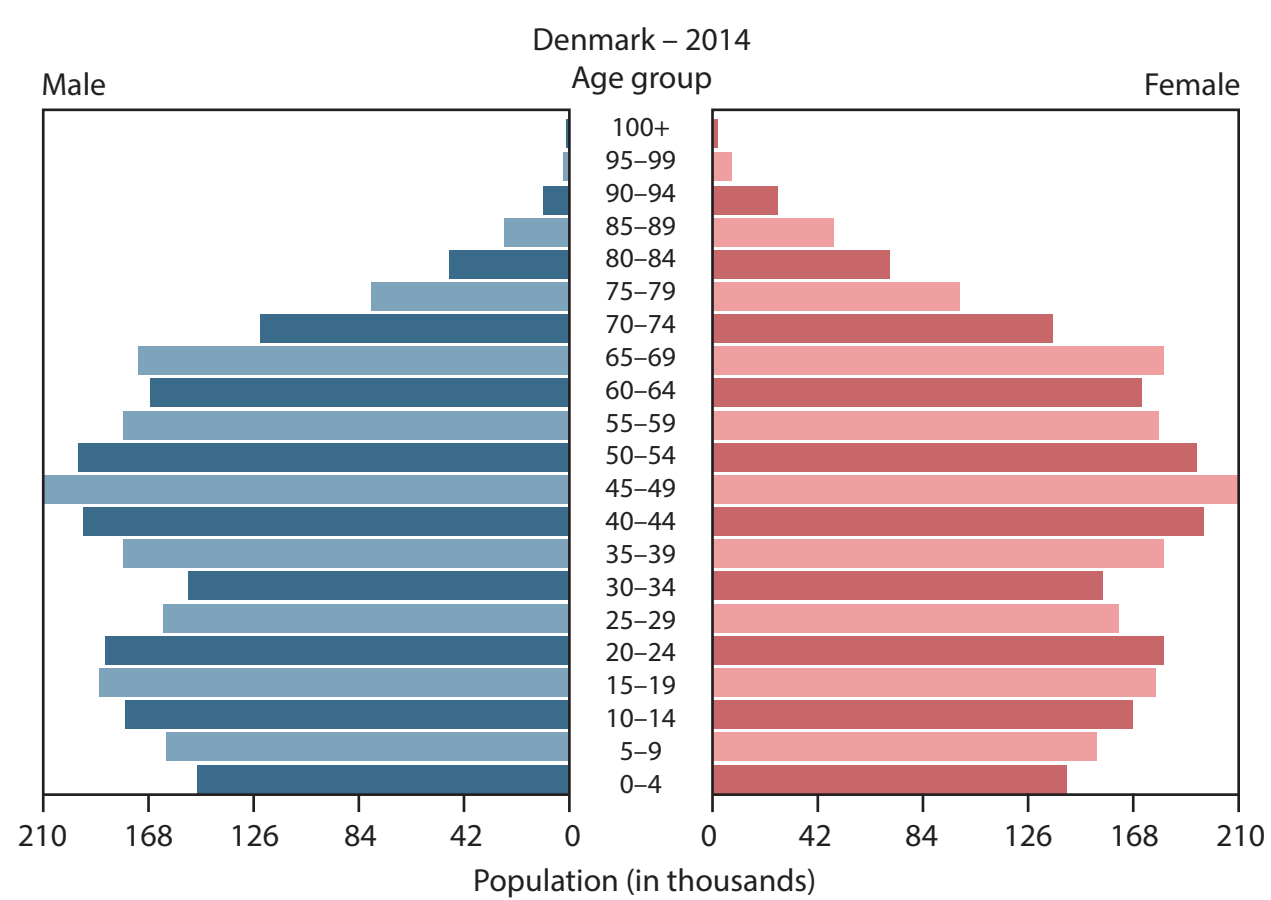
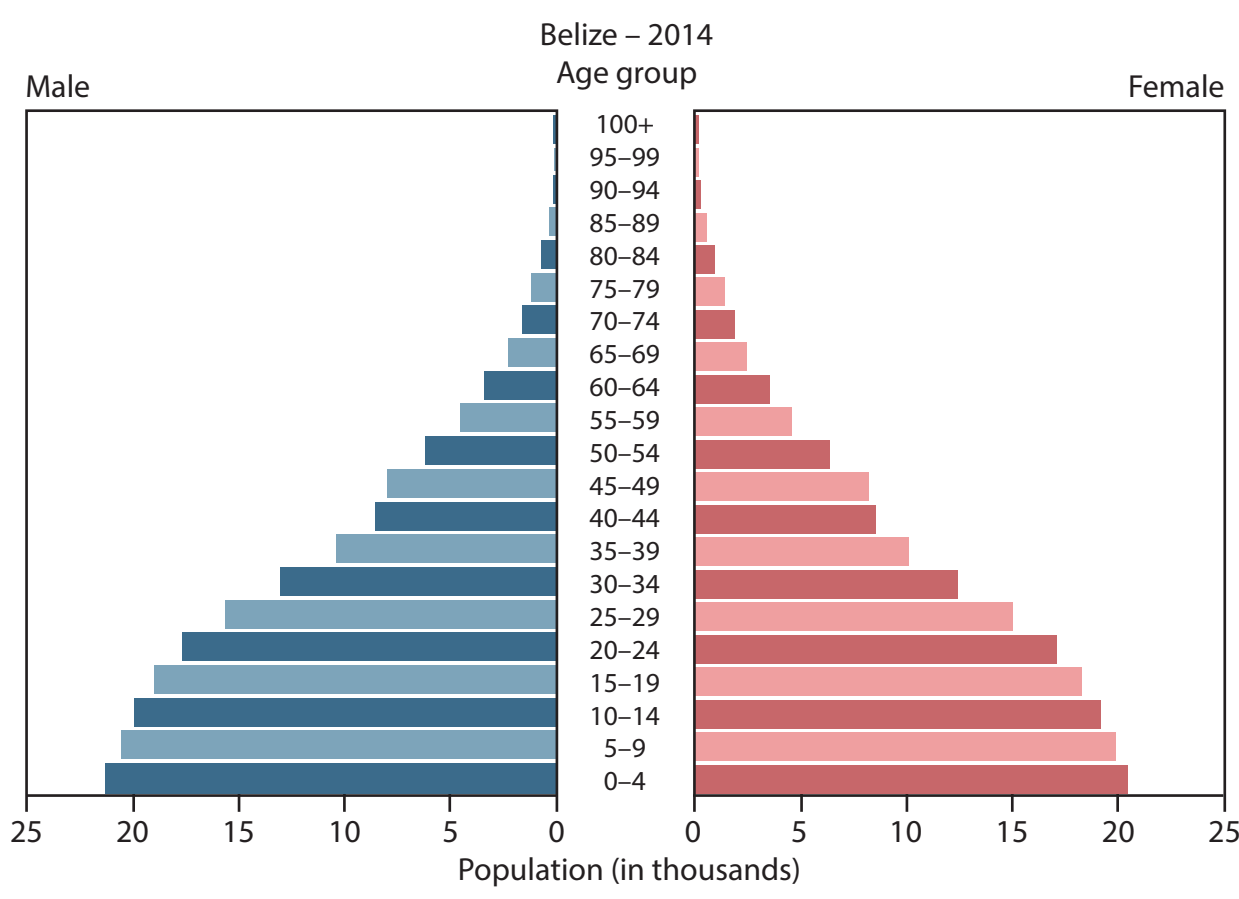


Figure 3b
Population pyramids for Belize (a LIC) and Denmark (a HIC), 2014

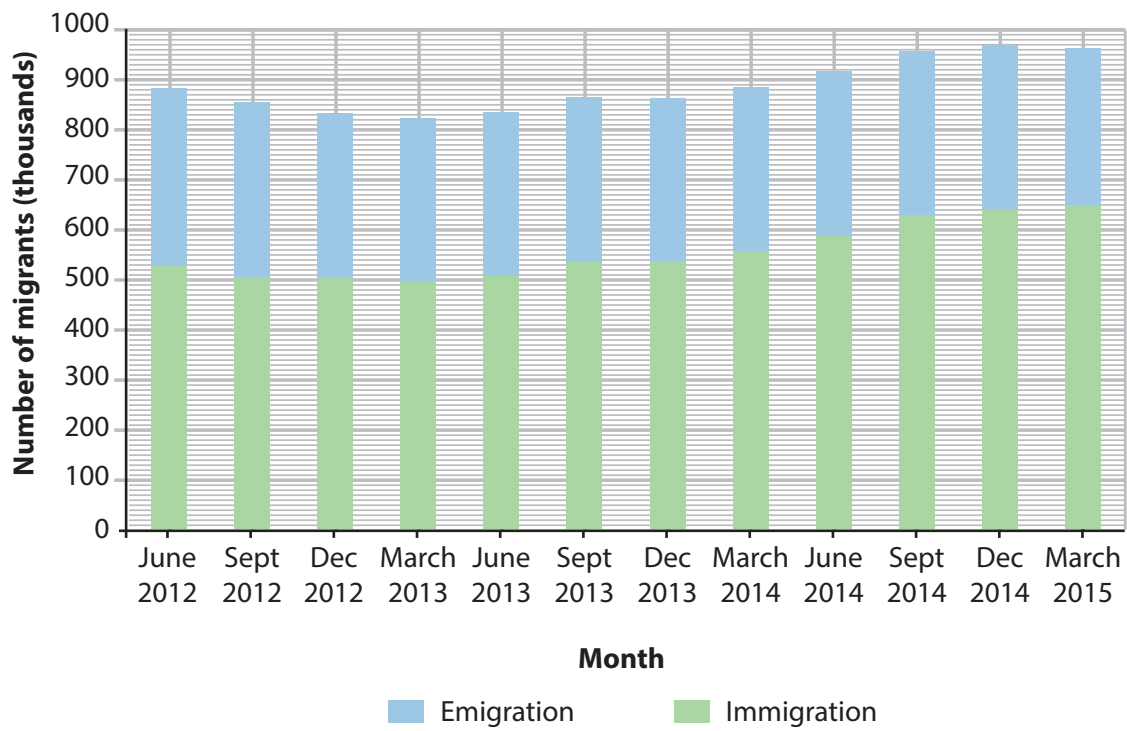


Figure 4a

UK migration, June 2012–March 2015



People hold up a banner in Germany in 2015, where the host country is showing support for those fleeing war zones in countries outside Europe such as Syria.

Figure 4b

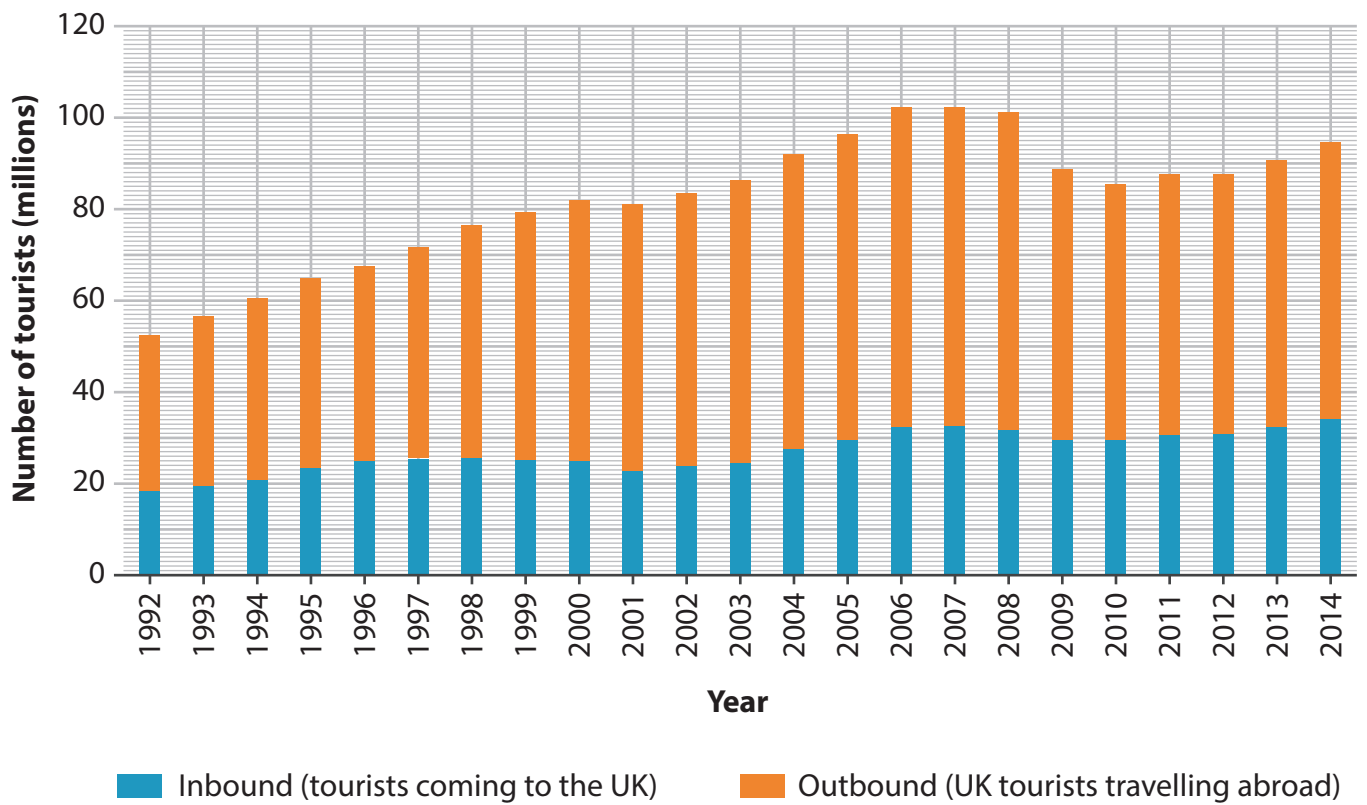


Figure 5a

Tourists to and from the UK, 1992–2014



Tourists on Levante beach in Benidorm. The modern hospital nearby has seen a rise in the number of overseas patients travelling to Spain for medical treatment.

Figure 5b

BLANK PAGE

BLANK PAGE

BLANK PAGE

Every effort has been made to contact copyright holders to obtain their permission for the use of copyright material. Pearson Education Ltd. will, if notified, be happy to rectify any errors or omissions and include any such rectifications in future editions.