

OCR

Oxford Cambridge and RSA

Tuesday 6 June 2017 – Afternoon

GCSE GEOGRAPHY B (and Short Course)

B563/A772/01/02/RB Key Geographical Themes (Foundation and Higher Tier)

RESOURCE BOOKLET



INFORMATION FOR CANDIDATES

- The following abbreviations may be used:
 - MEDC – More Economically Developed Country
 - LEDC – Less Economically Developed Country
 - EU – European Union which includes the United Kingdom
- The questions tell you which resources you need to use.
- This document consists of **8** pages. Any blank pages are indicated.

INSTRUCTION TO EXAMS OFFICER/INVIGILATOR

- Do not send this Resource Booklet for marking; it should be retained in the centre or recycled. Please contact OCR Copyright should you wish to re-use this document.

CONTENTS OF THE RESOURCE BOOKLET

- Fig. 1 – River flooding in the town of Cockermouth, Cumbria (B563, A772)
- Fig. 2 – A hydrograph of the River Cocker (B563, A772)
- Fig. 3a – Deadliest tropical storms occurring between 1991 and 2013 (B563)
- Fig. 3b – Location of places affected by the tropical storms shown in Fig. 3a (B563)
- Fig. 4 – Human activities which can make the effects of drought worse (B563)
- Fig. 5 – Indicators of development for selected countries (B563, A772)
- Fig. 6 – An aid project in Burundi, an LEDC in central Africa (B563, A772)

Fig. 1 River Flooding in the town of Cockermouth, Cumbria.

(For use with B563 Question 1 and A772 Question 1)



Fig. 2 A hydrograph of the River Cocker

(For use with B563 Question 1 and A772 Question 1)

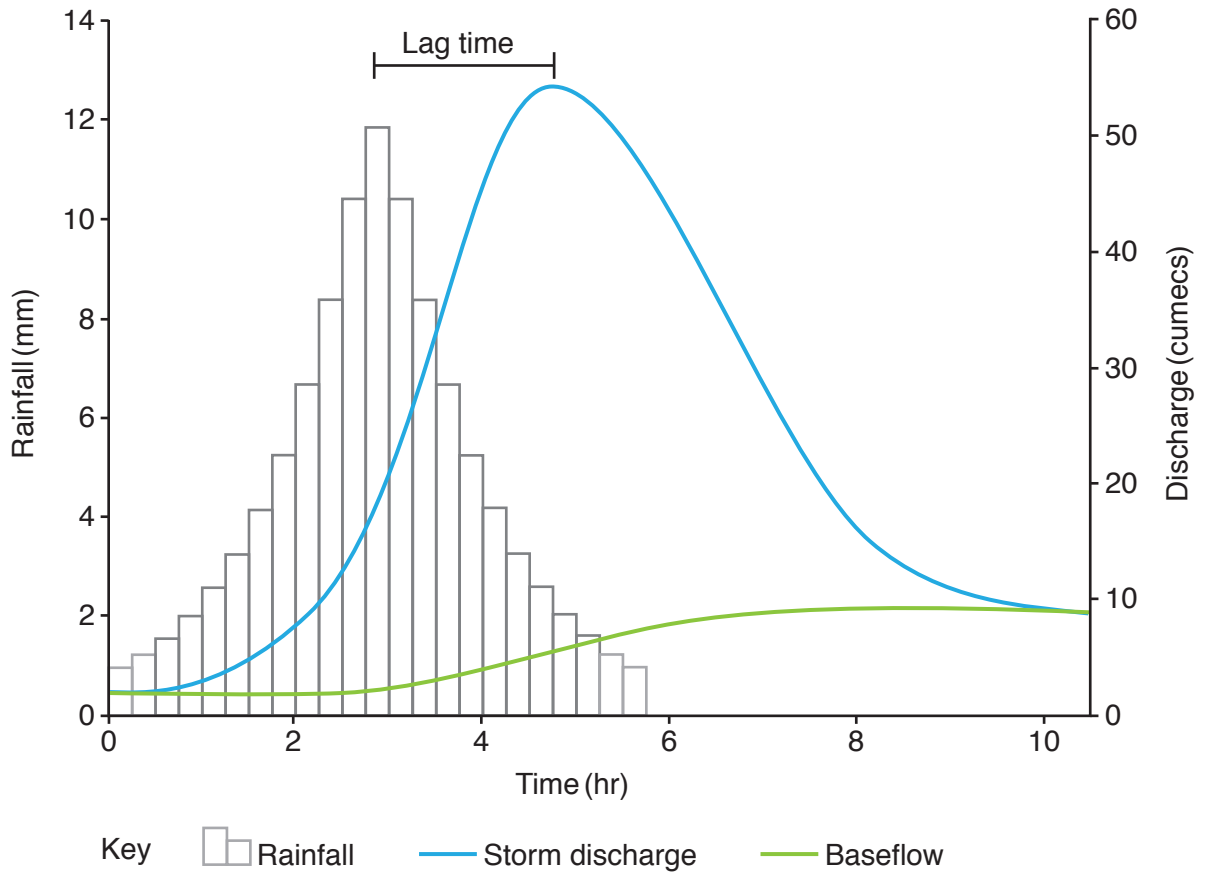


Fig. 3a Deadliest tropical storms occurring between 1991 and 2013.

(For use with B563 Question 2)

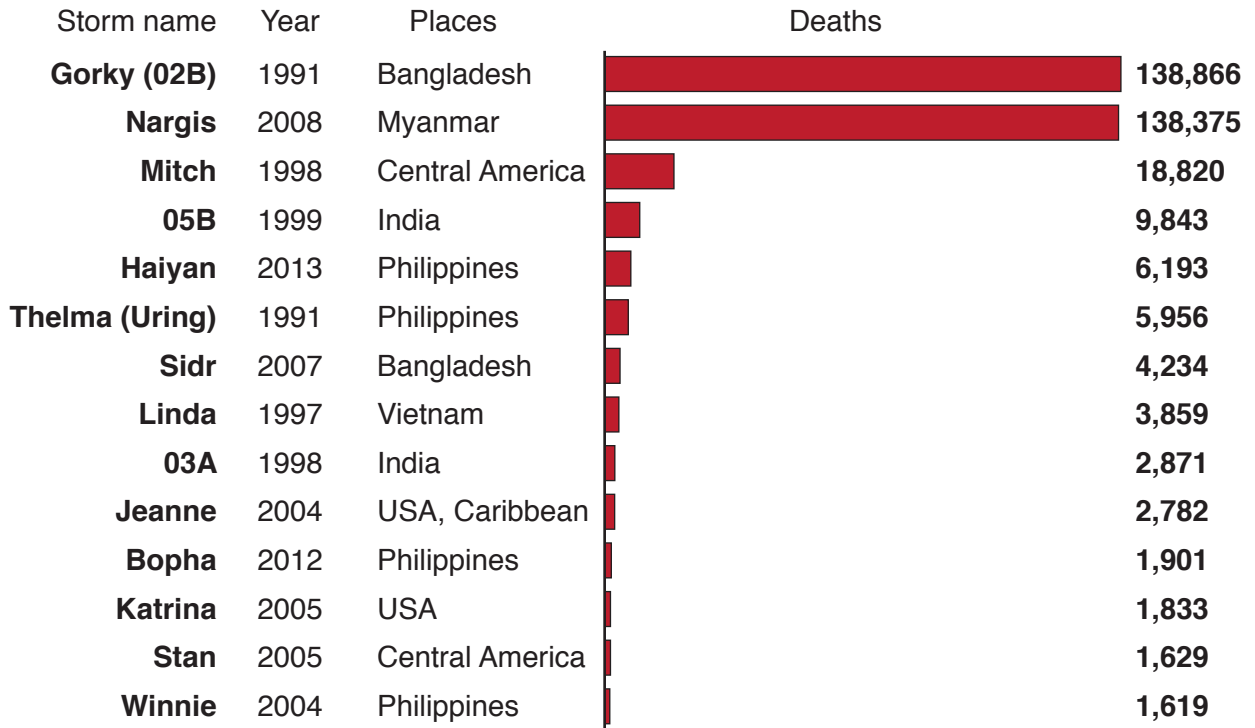


Fig. 3b Locations of places affected by tropical storms shown in Fig. 3a.

(For use with B563 Question 2)




● = locations of places affected

Fig. 4 Human activities which can make the effects of drought worse.

(For use with B563 Question 2)

Domestic (swimming pools)



Overgrazing



Irrigation



Deforestation



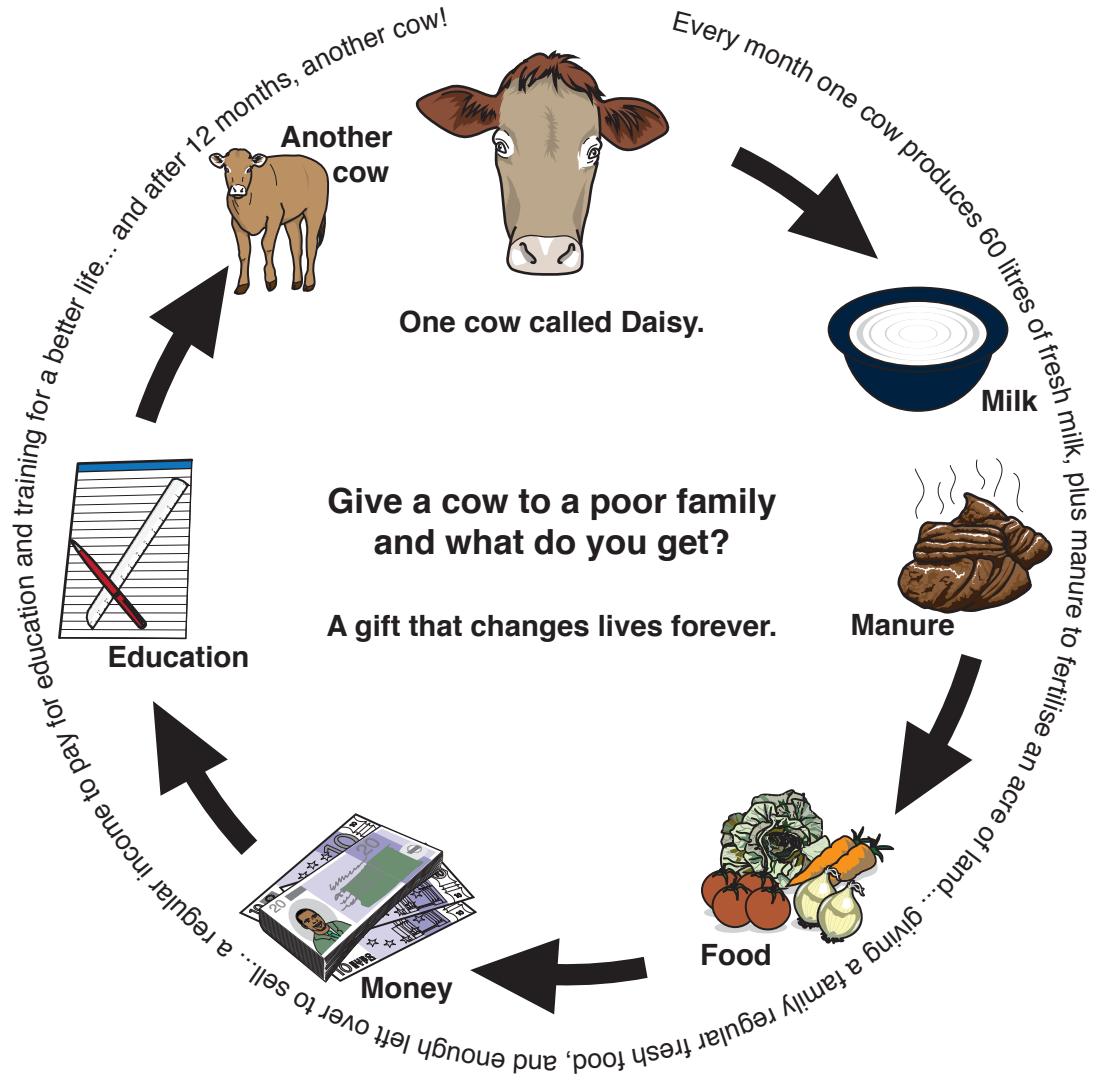
Fig. 5 Indicators of development for selected countries

(For use with B563 Question 3 and A772 Question 2)

Country	GDP per capita (US\$)	Life expectancy at birth (years)	Number of children dying under 5 years old (per 1000 live births)	Number of years of schooling	Adult literacy rate (%)
Norway	67,200	81.6	2.8	17.5	99.9
Italy	35,100	83.1	3.6	16	99
Uruguay	21,100	77.2	11.1	15.5	98.4
Bulgaria	15,700	74.2	11.6	14.4	98.4
Mongolia	11,900	69.4	31.8	14.6	98.3
Indonesia	10,700	68.9	29.3	13	92.8
Zambia	4,700	60.1	87.4	13.5	61.4
Mauritania	4,300	63.1	90.1	8.5	45.5
Niger	1,100	61.4	104.2	5.4	15.5

Fig. 6 An aid project in Burundi, an LEDC in central Africa.

(For use with B563 Question 3 and A772 Question 2)



Copyright Information

OCR is committed to seeking permission to reproduce all third-party content that it uses in its assessment materials. OCR has attempted to identify and contact all copyright holders whose work is used in this paper. To avoid the issue of disclosure of answer-related information to candidates, all copyright acknowledgements are reproduced in the OCR Copyright Acknowledgements Booklet. This is produced for each series of examinations and is freely available to download from our public website (www.ocr.org.uk) after the live examination series. If OCR has unwittingly failed to correctly acknowledge or clear any third-party content in this assessment material, OCR will be happy to correct its mistake at the earliest possible opportunity.

For queries or further information please contact the Copyright Team, First Floor, 9 Hills Road, Cambridge CB2 1GE.

OCR is part of the Cambridge Assessment Group; Cambridge Assessment is the brand name of University of Cambridge Local Examinations Syndicate (UCLES), which is itself a department of the University of Cambridge.