



Rewarding Learning

General Certificate of Secondary Education
2015–2016

Centre Number

--	--	--	--	--

Candidate Number

--	--	--	--	--

Double Award Science: Chemistry

Unit C1
Foundation Tier

[GSD21]



THURSDAY 25 FEBRUARY 2016, MORNING

TIME

1 hour.

INSTRUCTIONS TO CANDIDATES

Write your Centre Number and Candidate Number in the spaces provided at the top of this page.
Write your answers in the spaces provided in this question paper.
Answer **all ten** questions.





INFORMATION FOR CANDIDATES

The total mark for this paper is 70.
Figures in brackets printed down the right-hand side of pages indicate the marks awarded to each question or part question.
Quality of written communication will be assessed in Question 9.
A Data Leaflet, which includes a Periodic Table of the Elements, is included in this question paper.

For Examiner's use only	
Question Number	Marks
1	
2	
3	
4	
5	
6	
7	
8	
9	
10	
Total Marks	

- 1 (a) When copper is mixed with other metals new substances are produced which have particular properties.

Use lines to link each substance to the use you think is best.

Substance		Use	
<p>Brass Copper, zinc</p> <p>Strong, can be polished to look shiny</p>		<p>coins</p>  <p>© moodboard / Thinkstock</p>	
<p>Duralumin Copper, aluminium</p> <p>Strong and very light</p>		<p>candlesticks</p>  <p>© Zoonar RF / Zoonar / Thinkstock</p>	
<p>Cupronickel Copper, nickel</p> <p>Light and cheap. Can be easily carried</p>		<p>aircraft bodies</p>  <p>© Purestock / Thinkstock</p>	
<p>Bronze Copper, tin</p> <p>Resists corrosion. Lasts a long time</p>		<p>statues</p>  <p>© William Perry / iStock / Thinkstock</p>	[3]

- (b) How many different **elements** are named in these four substances?
Circle the correct answer.

4

5

6

8

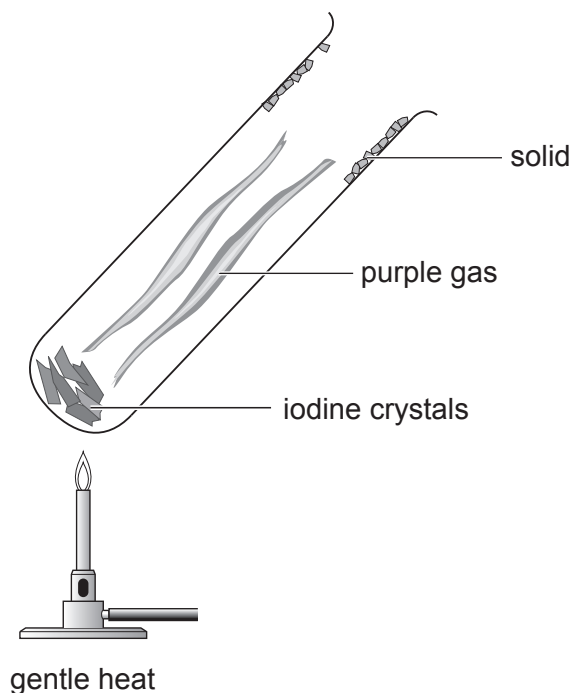
[1]

- (c) The substances above are mixtures which each include at least one metal. What name is given to this type of mixture?

_____ [1]

Examiner Only	
Marks	Remark
○	○

2 The diagram below shows the apparatus used to heat iodine crystals.



Source: Principal Examiner

(a) What name is given to the process in which a solid changes to a gas without forming a liquid?

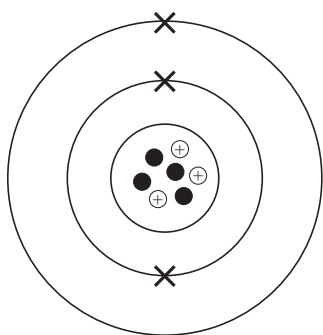
_____ [1]

(b) Name the solid formed near the top of the boiling tube.

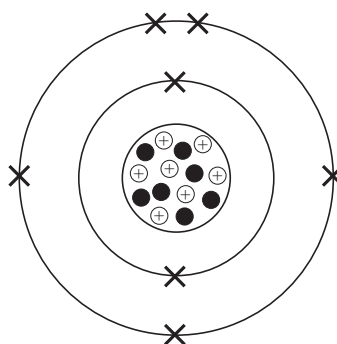
_____ [1]

Examiner Only	
Marks	Remark
<input type="text"/>	<input type="text"/>

3 The diagrams below show the structures of two different atoms.



A



B

(a) Complete each of the sentences below by choosing one of the words from the list below.

molecule nucleus electrons protons shells core

(i) The centre of an atom is called the _____. [1]

(ii) The particles in the centre of an atom are called neutrons and _____. [1]

(iii) The electrons are arranged in _____. [1]

(b) What is the **atomic number** of atom **B**?
_____ [1]

(c) What is the **mass number** of atom **A**?
_____ [1]

(d) Explain fully why diagram **A** represents an **atom** and not an **ion**.

_____ [2]

Examiner Only	
Marks	Remark
○	○

4 Many chemical elements are used in making smart phones.



© scanrail / iStock / Thinkstock

Read the passage and answer the questions which follow.

The screen on a smart phone is made of indium oxide mixed with tin oxide and is strengthened using potassium. The batteries have lithium oxide anodes and carbon cathodes. The wiring is made of copper. The alloys which are used for the outer casing include magnesium.

(a) Name an alkali metal compound used in making smart phones.

_____ [1]

(b) Name a **Group II** element used in making smart phone cases.

_____ [1]

(c) What **Group IV** element is used in the battery?

_____ [1]

(d) Name a **transition** element used in wiring the phone.

_____ [1]

(e) Indium is an element in Group III of the Periodic Table.

(i) How many electrons would you expect it to have in its outer shell?

_____ [1]

(ii) Suggest the formula for indium oxide.

_____ [1]

Examiner Only	
Marks	Remark

5 Complete the following sentences by using words from the boxes.
Circle the correct answers.

(a) When hydrated copper sulfate is heated strongly its colour changes

to

black
blue
white

[1]

(b) Anhydrous copper sulfate becomes to water.

yellow
white
blue

when added

[1]

(c) Copper carbonate is a

blue
black
green

solid.

[1]

(d) Blue solutions usually contain

aluminium
sodium
copper

salts.

[1]

(e) The compounds of Group 2 elements are

usually

red
silver
white

in colour.

[1]

Examiner Only

Marks

Remark

- 6 The table below gives information about five compounds, A, B, C, D and E which dissolve in water to give either acidic, neutral or alkaline solutions.

compound	produces H ⁺ ions in water	produces OH ⁻ ions in water	pH	colour of universal indicator in the solution
A	no	yes	9	dark green
B			1	red
C	no	yes	14	
D	no	no	7	green
E	yes	no	4	orange

- (a) Complete the table above by writing the missing words in the spaces. [3]

- (b) Use the information given in the table to identify each of the compounds A, B, C, D and E from the list given below.

sodium hydroxide sodium chloride ammonia
ethanoic acid hydrochloric acid

A _____

B _____

C _____

D _____

E _____

[4]


- (c) What units are used to measure the concentration of acids?
Circle the correct answer.

mol/dm mol³/dm mol/dm³ mol³/dm³

[1]

Examiner Only	
Marks	Remark
○	○

7 The symbol equation below shows the reaction between sodium and water.



(a) Choose the following from the equation:

(i) A **reactant** which is an element: _____ [1]

(ii) A **product** which is a compound: _____ [1]

(iii) A **diatomic** element: _____ [1]

(b) Complete the word equation for the reaction between potassium and water.

potassium + water \rightarrow _____ + _____ [2]

(c) How is sodium stored in the laboratory?

_____ [1]

(d) Describe the appearance of sodium

when freshly cut: _____ [1]

when left in air for a period of time: _____ [1]

(e) When sodium is added to hydrochloric acid, sodium chloride is formed. Explain why this reaction is not demonstrated in the school laboratory.

_____ [2]

Examiner Only	
Marks	Remark
○	○

BLANK PAGE
(Questions continue overleaf)

8 (a) Give an accurate definition of the term **solubility**.

Solubility is _____

_____ [4]

The table below gives information on whether some salts are soluble (S) or insoluble (I) in water.

cation \ anion	nitrate	carbonate	chloride	sulfate
magnesium	S	I	S	S
potassium	S	S	S	S
lead	S	I	I	I
calcium	S	I	S	S
ammonium	S	S	S	S

(b) Use the information in the table to deduce rules for the solubility of salts by completing the sentences:

(i) **Cations:** All _____ and _____ salts are soluble.

Anions: Most sulfates are _____ except for _____.

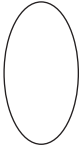

All **metal** _____ are soluble. [5]

(ii) Predict whether each of the following salts is soluble (S) or insoluble (I) in water.

potassium iodide _____

lead bromide _____

copper nitrate _____ [3]

Examiner Only	
Marks	Remark
	

(c) The chemical formula for ammonium sulfate is $(\text{NH}_4)_2\text{SO}_4$.

(i) How many elements are present in ammonium sulfate?

_____ [1]

(ii) How many oxygen atoms are present in the formula $(\text{NH}_4)_2\text{SO}_4$?

_____ [1]

(iii) How many atoms are present in the formula $(\text{NH}_4)_2\text{SO}_4$?

_____ [1]

(iv) Give the formula of a molecular ion present in ammonium sulfate.

_____ [1]

Examiner Only

Marks

Remark

Sources:

Thinkstock 159290482

Thinkstock 126987063

Thinkstock 94788781

Thinkstock 146772637

Permission to reproduce all copyright material has been applied for.
In some cases, efforts to contact copyright holders may have been unsuccessful and CCEA
will be happy to rectify any omissions of acknowledgement in future if notified.